

Geophysics 424 A1 Final exam
Electromagnetic and Potential field methods

Date : Wednesday April 23rd 2014, 9 am – noon
Location CCIS L1-029
Instructor : Dr. Martyn Unsworth
Time allowed 3 hours
Total points **116**

Instructions

Attempt all questions.

*Notes and books may **not** be used.*

Calculators may be used.

Cell phones and all other electronic devices must be switched off and stored.

All questions must be directed to the invigilator.

A separate formula sheet will be distributed

Question 1 : Maxwell's Equations (Total = 28 points)

A **plane** EM wave is travelling **vertically** downwards in the Earth in the z -direction.

The wave has an angular frequency, ω , and time dependence $e^{i\omega t}$

The electric field is **polarized** in the x -direction.

At this location, the Earth has the following properties

Magnetic permeability	$= \mu = \mu_0$	$= 4\pi \times 10^{-7}$ H/m
Dielectric permittivity	$= \epsilon = \epsilon_0$	$= 8.85 \times 10^{-12}$ F/m
Electrical conductivity	$= \sigma$	$= 0.01$ S/m
Speed of light	$= c$	$= 3 \times 10^8$ m/s

(a) Show that Maxwell's equations reduce to an ordinary differential equation for E_x

$$\frac{d^2 E_x(z)}{dz^2} = i\omega\sigma\mu E_x(z) - \omega^2 \mu\epsilon E_x(z)$$

Clearly explain all assumptions made in your derivation **(8 points)**

(b) Indicate the type of **electric current** that is represented by each term on the right hand side of this equation. At a frequency $f = 10$ Hz, which term is larger? Simplify this equation by discarding the **smaller term**.

(6 points)

(c) Find a solution to the equation in (a) of the form $E_x = Ae^{kz}$ where z increases positively into the Earth. Boundary conditions require that $E_x = E_0$ at $z = 0$ m

Derive values for A and k .

(6 points)

(d) The skin depth (δ) is defined as the depth at which $|E_x|$ has fallen to $1/e$ of the surface value. Show that

$$\delta = \sqrt{\frac{2}{\omega\mu\sigma}} \sim \frac{503}{\sqrt{\sigma f}} \text{ (m)} \quad \textbf{(4 points)}$$

(e) A VLF signal is being used to communicate with a submarine at a frequency of 10 KHz. What is the maximum depth at which signals will be detectable? The seawater has a resistivity of 0.3 ohm-m. Reception ceases when the amplitude of the electric field has been reduced to 0.01% of the surface value. **(4 points)**

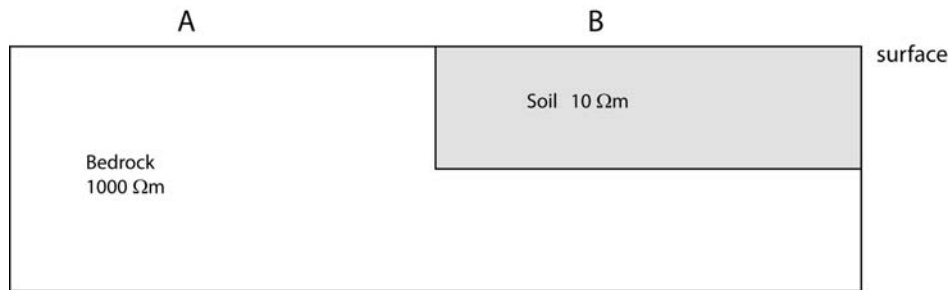
Question 2 : Resistivity of rocks (Total = 13 points)

(2a) Draw a cross section through a **hydrothermal geothermal reservoir**. Explain the physical basis for each region having a high, or low, electrical resistivity. **(6 points)**

(2b) What is one **limitation** of using MT to study this type of reservoir? **(3 points)**

(2c) The **lower continental crust** is often found to have a low resistivity. What are the two main explanations? Which one do you prefer - and why? **(4 points)**

Question 3 : Frequency domain EM methods (Total = 13 points)



An EM31 survey takes place where a thin layer of soil overlies bedrock

The basement outcrops on the left and has a resistivity of $1000 \Omega\text{m}$

The soil has a resistivity of $10 \Omega\text{m}$

TX-RX separation was $s = 3.66 \text{ m}$ and frequency was 9800 Hz

The EM31 is carried 1 m above the surface by Matthew Comeau

(3a) Prove that for a $10 \Omega\text{m}$ halfspace, the near-field approximation is valid for the EM31
(3 points)

(3b) At 'A', the EM31 was used in **vertical dipole mode**? What apparent conductivity will the EM31 read? Assume that the conductivity of the air is zero.
(4 points)

(3c) At 'B' the EM31 was used in **horizontal dipole mode** and an apparent conductivity of 0.05 S/m was measured. How thick is the soil at 'B'?
(6 points)

Question 4 : Marine CSEM methods (Total = 12 points)

A marine CSEM survey takes place in deep water in a region where the seawater has a resistivity of $0.25 \Omega\text{m}$ and the seafloor has a resistivity of $3 \Omega\text{m}$.

A frequency of 1 Hz is transmitted over a distance of 5 km.

The transmitter is a horizontal electric dipole.

(4a) Show that this type of EM system corresponds to the **far field** (3 points)

(4b) Explain what is meant by **inline** and **broadside** configuration of transmitter and receivers. Include a diagram. (4 points)

(4c) How can a CSEM survey be used to detect a **thin hydrocarbon layer**? Include a sketch of the inline electric field as a function of distance for the cases of oil present and oil absent. (5 points)

Question 5 : Frequency domain EM surveys (Total = 16 points)



A frequency domain EM survey is flown over two buried conductors (A and B)

Two configurations of TX and RX are used.

The secondary magnetic field (H^S) is in-phase with the primary magnetic field (H^P).

(5a) Sketch the **primary** and **secondary** magnetic field lines when the TX-RX is above each conductor. Sketch on figure above. **(8 points)**

(5b) For each TX-RX geometry, which conductor (A or B) will give the biggest response in $|H^T/H^P|$? **(4 points)**

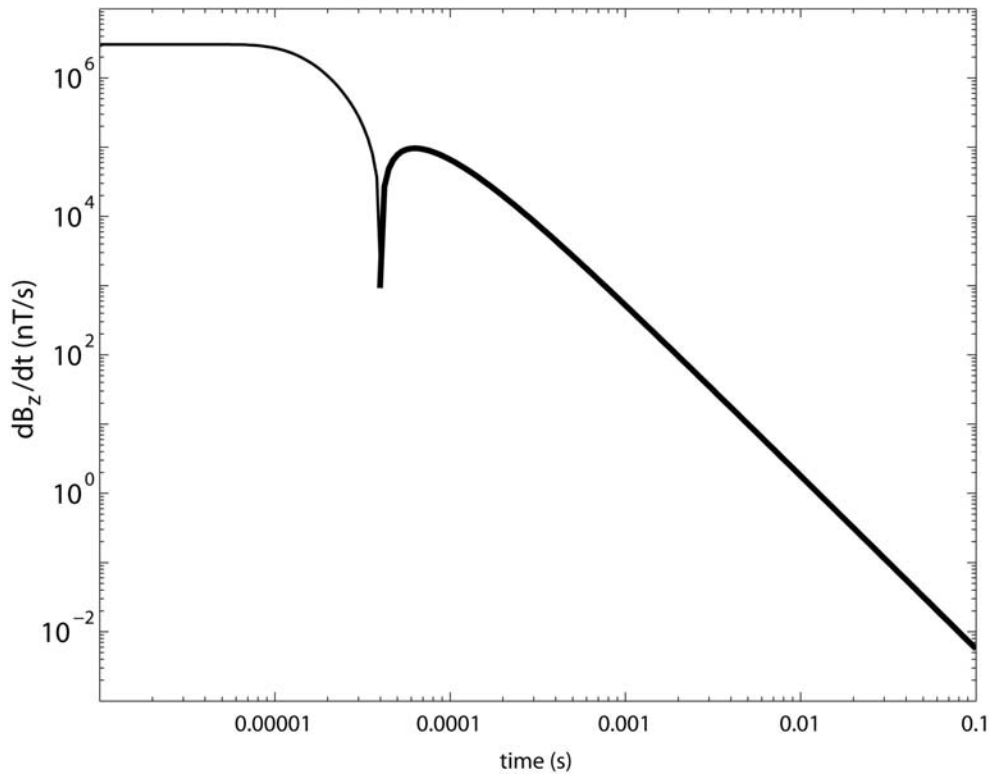
(5c) Indicate if $|H^T/H^P| > 1$ or $|H^T/H^P| < 1$ above each conductor for the co-axial and co-planar configurations. **(4 points)**

Question 6 : Time-domain EM (Total = 19 points)

A time-domain EM system is being used to measure the resistivity during a ground water survey. The system parameters are:

Transmitter geometry 10 m x 10 m square loop
 Transmitter current I = 200 amps
 Number of turns on transmitter N = 20

The transient below was recorded at a station.
 Thin line denotes negative values and thick line denotes positive values.
 Selected data values are listed in the table.



Time (s)	$\frac{dB_z}{dt}$ (nT/s)
0.0001	66042
0.001	519.47
0.01	1.7822
0.03	0.115
0.1	0.005682

(6a) Explain the physics of time domain EM in terms of a "smoke-ring" of induced electric current. Include diagrams of the induced current and secondary magnetic fields at various times. **(6 points)**

(6b) Use the late-time decay equation to determine the gradient of $\frac{dB_z}{dt}$ as a function of time on a log-log plot?

(2 points)

(6c) Calculate the conductivity of the ground at this location. Assume that conductivity does not vary with depth.

(5 points)

(6d) At approximately what time does the **late time equation** become valid?

(2 points)

(6e) The system has a noise level of 1 nT/s and is moved to site where the resistivity is 500 ohm-m. What is the **maximum depth** that can be imaged?

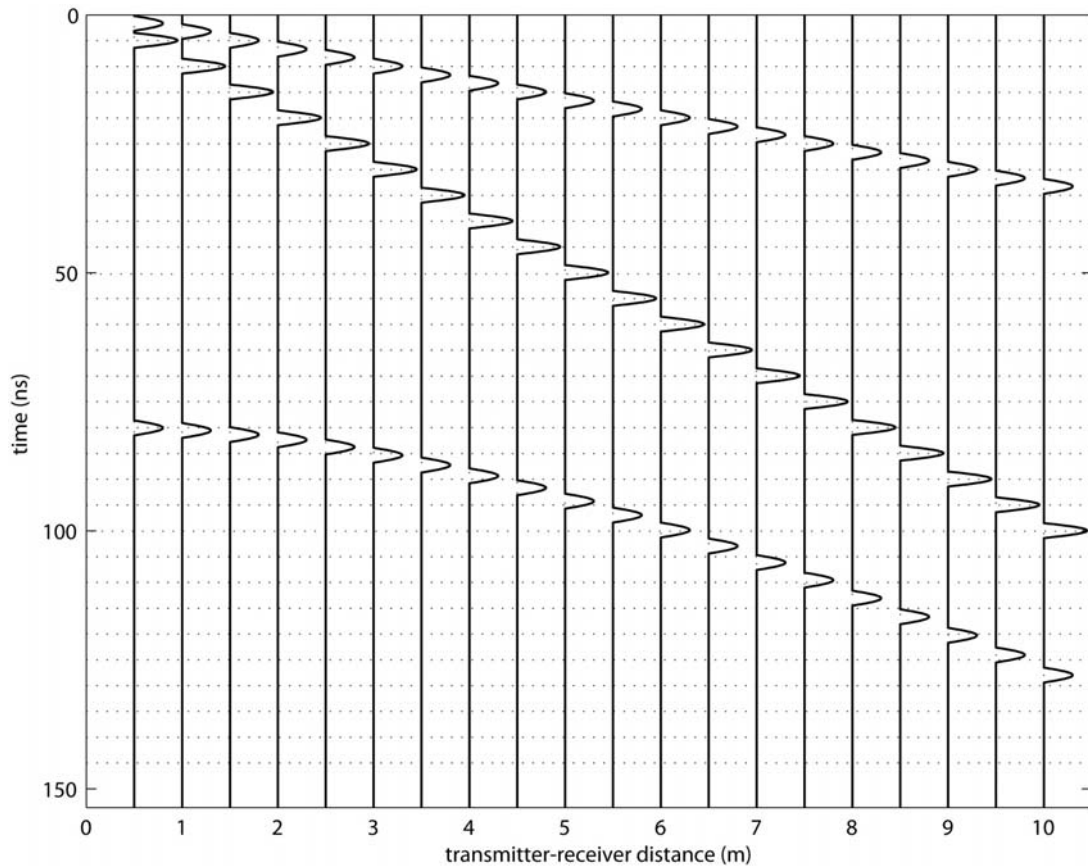
(4 points)

Question 7 : Ground-penetrating radar (Total = 15 points)

GPR is being used to detect a horizontal slab of buried concrete. The concrete is covered by a layer of soil. The radar frequency is 200 MHz

- v_1 = velocity of radar wave in soil
- v_2 = velocity of radar wave in concrete
- d = depth of soil layer
- x = transmitter-receiver distance (variable)

The data collected is shown below as a set of traces, spaced every 50 cm



- (6a) Identify the **air wave** on the plot above. Confirm that it is travelling at the expected velocity **(3 points)**
- (6b) Draw a diagram showing the paths taken by the other two arrivals **(3 points)**
- (6c) Calculate the velocity in the soil, v_1 **(2 points)**
- (6d) Calculate the depth of the layer, d **(3 points)**
- (6e) Calculate the relative permittivity of the soil **(2 points)**
- (6f) Calculate the moisture content of the soil (θ_v) **(2 points)**